



QUESTIONS **40**



TOTAL MARKS **80**



DURATION **60 mins**

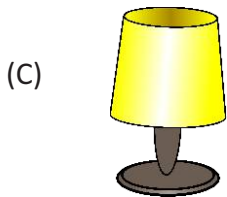

GRADE

3

Instruction for Students:

- Read the question carefully before answering.
- Each question has 4 options (A, B, C & D).
- **Grand Finale Marking System:-**
Each correct answer carries 2 marks.
For each unattempted question, 2 marks will be deducted.
For each wrong answer, 2.5 marks will be deducted.
- Grand Finale Result will be declared Online after 45 days from the exam date. To know your Result, login to www.neltas.com and use given Seat Number.

1. Choose the living thing from the pictures shown below:



2. A tree is protected by an outer covering called _____.

- (A) crown (B) bark
(C) branch (D) trunk

3. A caterpillar grows up to become a _____.

- (A) dragonfly (B) earthworm
(C) snail (D) butterfly

4. Which of the following birds uses its beak to catch fish from water?

- (A) Eagle (B) Parrot
(C) Vulture (D) Crane

5. The reproductive system helps in _____.

- (A) producing babies
- (B) digesting food
- (C) removing waste from the body
- (D) taking breath

6. _____ are the air bags in our chest.

- (A) Lungs
- (B) Brain
- (C) Intestine
- (D) Stomach

7. How do we deduct that LPG is leaking?

- (A) Fumes in the air are visible.
- (B) We cannot detect it
- (C) By its smell
- (D) By its taste

8. When you see a stranger offering you a bribe to come with them, what should you do?



- (A) Do not go near him/her.
- (B) Run away from him/her.
- (C) Inform your parents.
- (D) All of the above.

9. How can you protect your computer from viruses?

- (A) Always remember to log off when you have finished using the computer.
- (B) Never click the links that you get from people you don't know.
- (C) Your computer will protect itself.
- (D) All of the above.

10. Bullying includes _____.

- (A) threat
- (B) spreading rumours about someone
- (C) verbal abuse
- (D) All of the above

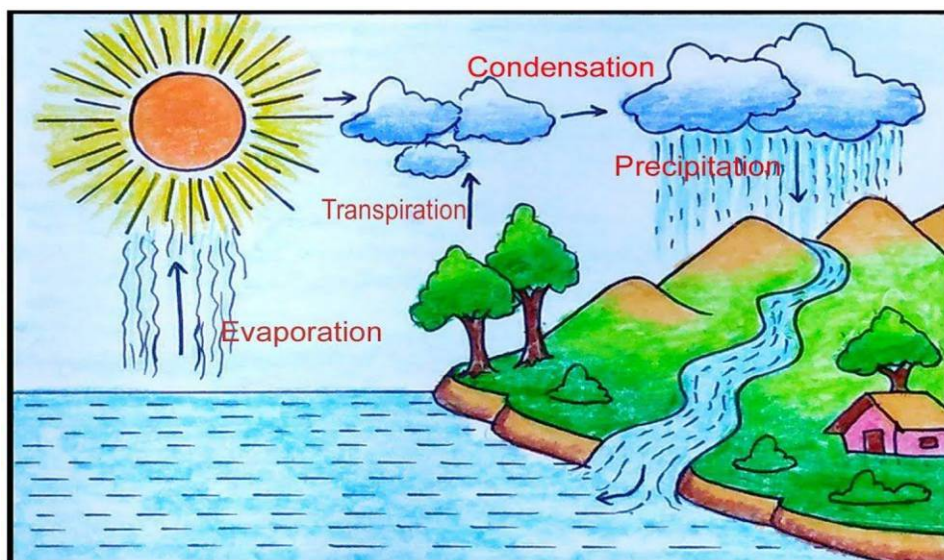
11. Eating here helps families build relationships.

- (A) in-front of the television
- (B) in our own bedrooms
- (C) at the dinner table
- (D) All of the above

12. Which of the following is the best way to save water at home?

- (A) Fix the leaking taps immediately.
- (B) Don't leave the tap running while you brush your teeth.
- (C) Rinse vegetables in a pan of water rather than under the running tap.
- (D) All of the above.

13. How does the water cycle begin?



- (A) With the ocean's energy
- (B) With the Sun's energy
- (C) With the wind energy
- (D) With the rain energy

14. The addition of harmful materials to the environment is known as _____.

- (A) pollution
- (B) conservation
- (C) water cycle
- (D) recycle

15. Plastic is _____ steel.

- (A) heavier than
- (B) lighter than
- (C) same as
- (D) None of the above

16. Find the odd one out with respect to the state of matter.

- (A) Stone
- (B) Sugar
- (C) Oil
- (D) Bedsheet

17. Which one of the following is the characteristic of a living thing?

- (A) Living things do not grow.
- (B) Living things cannot move from place to place.
- (C) Living things need food to live.
- (D) Living things never die.

18. Which type of plant is a sunflower?

- (A) Shrub
- (B) Herb
- (C) Tree
- (D) Climber

19. Insects respire through their _____.

- (A) lungs
- (B) gills
- (C) skin
- (D) fins

20. Which of the following birds can fly to great heights?

- (A) Ostrich
- (B) Duck
- (C) Sparrow
- (D) Eagle

21. Which organ is shown in the diagram?



- (A) Lungs
(B) Liver
(C) Stomach
(D) Heart

22. Breathing is a part of _____.

- (A) Circulation
(B) Digestion
(C) Respiration
(D) Excretion

23. Pick the odd man out.

- (A) Keep the burnt area under running water.
(B) Do not run on the road.
(C) Do not play with scissors.
(D) Do not put a sharp object in the nose.

24. What must you do if you experience bad touch?

- (A) Tell your parents
(B) Tell everybody
(C) Keep quiet
(D) Cry

25. What is cyber bullying?

- (A) When someone does not respond to your text message.
(B) When anyone uses the internet, a mobile, or other technology to deliberately upset you.
(C) When someone sends you an e-mail giving you the answers to your homework.
(D) All of the above.

26. If someone bullies you, you should _____.

- (A) bully that kid back
(B) ignore the bully
(C) feel unworthy
(D) None of the above

27. Which of the following is NOT a part of healthy living?

- (A) Sleep
(B) Cleanliness
(C) Physical exercise
(D) None of the above

28. We can obtain groundwater from _____.

- (A) waterfalls
(B) wells
(C) lakes
(D) ponds

29. In which of the following way the water moves from the land to the atmosphere?
(A) Precipitation (B) Sublimation
(C) Evaporation (D) Condensation
-
30. Which of the following is NOT one of the 3 R's that helps to conserve the environment?
(A) Recycle (B) Reuse
(C) Reduce (D) Replace
-
31. Which of the following is NOT a state of matter?
(A) Solid (B) Liquid
(C) Gas (D) Smoke
-
32. Living things need food, _____ and air to live.
(A) water (B) soil
(C) salt (D) fuel
-
33. Which of the following is a tree?
(A) Coriander (B) Rose
(C) Coconut (D) All of the above.
-
34. Our stomach is located _____.
(A) on the left side of the body (B) in the head
(C) on the right side of the body (D) in the chest
-
35. What carries oxygen to all parts of the body?
(A) Urine (B) Blood
(C) Saliva (D) None of the above.
-
36. It does not have a fixed shape or size. It takes the shape and volume of the container.
(A) Solid (B) Liquid
(C) Gas (D) Matter
-
37. Which of the following is an unhealthy habit?
(A) Sharing food
(B) Bathing every day
(C) Drinking boiled and filtered water
(D) Eating without washing hands
-
38. The natural source of pure water is _____.
(A) sea (B) river
(C) rain (D) pond
-
39. What are some ways that we can keep from polluting?
(A) We can use things that will not hurt the earth.
(B) We can carpool.
(C) We can recycle some things instead of throwing them away.
(D) All of the above.
-
40. Liquids _____ to change to a gas.
(A) condense (B) evaporate
(C) freeze (D) None of the above.
-

ANSWERS

1	2	3	4	5	6	7	8	9	10
B	B	D	D	A	A	C	C	B	D
11	12	13	14	15	16	17	18	19	20
C	D	B	A	B	C	C	A	C	D
21	22	23	24	25	26	27	28	29	30
D	C	A	A	B	D	D	B	C	D
31	32	33	34	35	36	37	38	39	40
D	A	C	A	B	A	D	C	B	B